

2018

CHEMISTRY

(Major)

Paper : 2.1

(Physical Chemistry)

Full Marks : 60

Time : 3 hours

*The figures in the margin indicate full marks
for the questions*

1. Answer the following as directed : 1×7=7

(a) State True or False :

“Gases can be liquefied by applying pressure at any temperature.”

(b) Find the critical volume of helium gas
($b = 0.01927 \text{ dm}^3 \text{ mol}^{-1}$).

(c) If c_0 is the speed of light in vacuum and c is the speed of light in a medium, then what will be the expression for refractive index of the medium?

(2)

(d) Choose the correct answer :

At the same temperature, 0.01M solution of urea is isotonic with

- (i) 0.01M NaCl solution
- (ii) 0.01M MgCl_2 solution.
- (iii) 0.01M glucose solution
- (iv) 0.01M sodium acetate solution

(e) Choose the correct answer :

If ΔT_b is the elevation in boiling point for an electrolytic solution and ΔT_b° is elevation of the boiling point for a non-electrolyte solution of the same concentration in the same solvent, then the van't Hoff factor is given by

- (i) $\Delta T_b \times \Delta T_b^\circ$
 - (ii) $\Delta T_b^\circ / \Delta T_b$
 - (iii) $\frac{\Delta T_b - \Delta T_b^\circ}{2}$
 - (iv) $\Delta T_b / \Delta T_b^\circ$
- (f) Define molar conductivity of an electrolytic solution.
- (g) Give the condition for maximum buffer capacity of a buffer solution.

(3)

2. Answer the following questions :

2×4=8

- (a) For a monatomic ideal gas, show that the molar heat capacity at constant volume is $12.471 \text{ JK}^{-1} \text{ mol}^{-1}$.
- (b) A liquid P has half the surface tension of liquid Q. Again the density of liquid P is twice the density of liquid Q. If in a capillary tube P rises to 10.0 cm, what will be the rise of liquid Q in the same capillary tube when inserted identically at the same temperature?
- (c) Define ideal solutions. Give the values of ΔV and $\Delta_{\text{mix}} H$ for an ideal solution.
- (d) What are concentration cells? Give one suitable example of concentration cell with transference.

3. Answer the following questions (any three) :

5×3=15

- (a) (i) Give the postulates of kinetic molecular theory of gases. 3
- (ii) Give the limitations of van der Waals equation of state. 2

- (b) What is 'degrees of freedom' of a molecule? Calculate the various degrees of freedom of the following molecules :

$$2+3=5$$

(i) CO_2

(ii) H_2O

- (c) (i) Give the principle of the stalagmo-meter method of determination of surface tension of a liquid. 3

(ii) The numbers of drops of water and an organic liquid in drop number method from a stalagmometer are 100 and 200 respectively. Calculate the surface tension of the organic liquid at 298 K. Given that at 298 K, the surface tension of water is $7.28 \times 10^{-3} \text{ N m}^{-1}$, density of water is 1.0 kg dm^{-3} and density of the organic liquid is 0.9 kg dm^{-3} . 2

- (d) (i) What is limiting molar conductivity? State the Kohlrausch law of the independent migration of ions. 2

(ii) The limiting molar conductances of Al^{3+} and SO_4^{2-} are $189 \text{ S cm}^2 \text{ mol}^{-1}$ and $160 \text{ S cm}^2 \text{ mol}^{-1}$ respectively. Calculate the limiting molar conductance of $\text{Al}_2(\text{SO}_4)_3$. 3

- (e) (i) Define degree of dissociation of a weak electrolyte. 1

(ii) State Ostwald's dilution law. Explain the law with the help of a suitable example. 4

4. (a) Answer either [(i) and (ii)] or [(iii) and (iv)] :

(i) Derive the equation of corresponding states. Justify why this equation can be considered as a generalized equation of state for a gas. 5

(ii) Derive an expression for osmotic pressure of a dilute solution from thermodynamic consideration. 5

(iii) What are transport properties of gas? Using kinetic theory, derive an expression for self-diffusion coefficient of a gas. 5

(iv) Discuss the construction of a calomel electrode. Explain the reaction taking place in the electrode. 5

- (b) Answer either [(i), (ii) and (iii)] or [(iv), (v) and (vi)] :

(i) Define the terms collision cross-section and mean free path. 3

(6)

- (ii) What are liquid crystals? Mention the uses of liquid crystals. 4
- (iii) A solution, composed of 0.05M of an organic acid and 0.5M of its sodium salt, gives a pH of 5.5 at 298 K. Calculate the dissociation constant of the acid. 3
- (iv) Explain the terms activity and activity coefficient. 2
- (v) Discuss briefly about the structure of liquid crystals. 4
- (vi) What is ionic strength of an electrolytic solution? Calculate the ionic strength of 0.01 mol kg⁻¹ H₂SO₄ solution. 1+3=4

(c) Answer either [(i) and (ii)] or [(iii) and (iv)] :

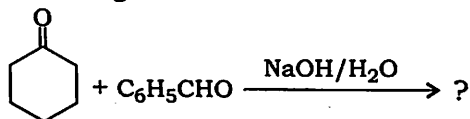
- (i) What is buffer capacity of a buffer solution? Explain the term buffer action with the help of a suitable example. 1+4=5
- (ii) Define electrode potential. Calculate the single electrode potential at 298 K of a half-cell for zinc electrode dipped in 0.01M ZnSO₄ solution. Given

$$E_{\text{Zn}^{2+}|\text{Zn}}^{\circ} = -0.763 \text{ volt} \quad 1+4=5$$

(7)

- (iii) What are fuel cells? Write the electrode reactions of hydrogen-oxygen fuel cell. Calculate the standard e.m.f. of hydrogen-oxygen fuel cell. Mention one use of fuel cell. 1+2+2+1=6
- (iv) Explain briefly how equilibrium constant can be calculated from the measurement of standard electrode potential. 4

- (ii) Predict the major product and propose a mechanism for the reaction given below : 3



- (iii) Using the Hell-Volhard-Zelinsky reaction, propose a synthetic route for the preparation of alanine. 2
- (iv) Give a chemical method to distinguish three isomeric amines having the molecular formula $\text{C}_3\text{H}_9\text{N}$. 3
- (f) (i) Propose a mechanism for the benzoin condensation reaction. What role does cyanide ion play in this reaction? 3+1=4
- (ii) Grignard reagents fail to form addition compounds with olefins. Why? 2
- (iii) Distinguish between phenol and benzyl alcohol using chemical methods. 2
- (iv) Diazonium salts can be used to prepare heterocyclic compounds. What happens when o-phenylenediamine is diazotized? Write the reaction. 2

★ ★ ★

2018

CHEMISTRY

(Major)

Paper : 2-2

(Organic Chemistry)

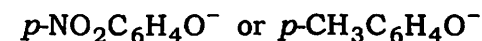
Full Marks : 60

Time : 3 hours

The figures in the margin indicate full marks for the questions

1. Answer any seven questions : 1×7=7

- (a) Explain, why β -keto acids like $\text{RCOCH}_2\text{CO}_2\text{H}$ readily decarboxylate on heating.
- (b) Indicate which reagent is expected to be more nucleophilic toward CH_3Br in ethanol and why :



- (c) Predict the major product :



- (d) How would the pK_a values of ammonium ions change if they were determined in a solvent less polar than water?

(2)

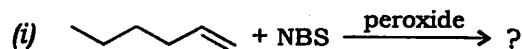
- (e) Arrange the following classes of compounds in decreasing order of boiling point considering that they have same number of carbon atoms :

Carboxylic acids, Amides,
Ketones, Nitriles

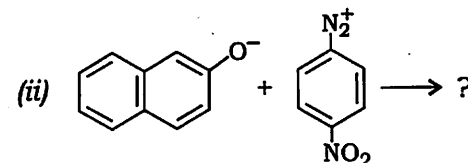
- (f) Semicarbazide has two NH_2 groups, but only one of them forms an imine. Explain.
- (g) Which tautomeric form of 2,4-pentanedione is more stable in—
(i) water;
(ii) hexane?
- (h) The reaction of an alkene with Br_2 does not require a Lewis acid but the reaction of benzene does. Why?

2. Answer any four questions : $2 \times 4 = 8$

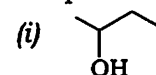
- (a) With the help of an example, bring out the difference between a chiral centre and a stereogenic centre.
- (b) Ketones do not undergo Knoevenagel reaction with malonic acid or its esters. Why?
- (c) What products would you expect from the following reactions? $1 \times 2 = 2$



(3)

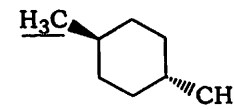
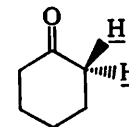


- (d) Account for the fact that acetals are stable to bases but are readily hydrolyzed by acids. 2
- (e) How would you employ organometallic reagents to make the following compounds? $1 \times 2 = 2$



3. Answer any two from (a), (b) and (c) and any one from (d) and (e) : $5 \times 3 = 15$

- (a) Compare the relative stabilities of chair, boat and twist-boat conformations of cyclohexane. 5
- (b) (i) Indicate whether the underlined atoms or groups are homotopic, enantiotopic or diastereotopic : 2



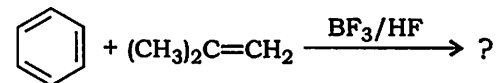
(4)

- (ii) Using 2,3,4-trihydroxyglutaric acid, point out the stereogenic, non-stereogenic, chirotopic and achirotopic carbons. 3
- (c) (i) Which conformer is favoured in ethylene glycol and why? 1½
- (ii) Which conformer is favoured in 1,2-dibromoethane and why? 1½
- (iii) Butane has chiral conformers, yet it is optically inactive. Explain. 2
- (d) Provide evidences for aromatic electrophilic substitutions involving—
- (i) π -complex;
- (ii) σ -complex.
- Draw the energy profile diagram for both the mechanisms. 4+1
- (e) (i) What do you mean by partial rate factor? How is it calculated? 1+1=2
- (ii) The chlorination of toluene by using chlorine in aqueous acetic acid takes place 344 times faster than does the same reaction of benzene. The product ratio is 59.9% *ortho*-, 0.3% *meta*- and 39.8% *para*-chlorotoluene. Calculate the partial rate factors for the reaction. 3

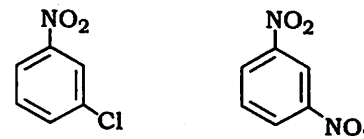
(5)

4. Answer either (a) or (b) and any two from (c), (d), (e) and (f) : 10×3=30

- (a) (i) Write the product obtained for the reaction given below and propose a mechanism for the same : 1+3=4



- (ii) Nitration of *N,N*-dimethyl aniline gives mainly the *m*-nitro derivative when concentrated nitric and sulphuric acids are used but mainly the *o*- and *p*-nitro derivatives in less acidic conditions. Why? 2
- (iii) Indicate the position(s) of major monoelectrophilic substitution of each of the following compounds and account for the same : 2



- (iv) When nitrations of aromatic substrates are carried out, nitronium ion is said to act as an electrophile. Provide two evidences in support of formation of the nitronium ion. 2

- (b) (i) What happens when methyl picrate is allowed to react with potassium ethoxide? Propose a mechanism for the reaction and justify with evidences. 1+2+1=4
- (ii) Account for the observation that nucleophilic substitution of chlorobenzene takes place through a benzyne mechanism whereas nucleophilic substitution of chloronitrobenzenes proceeds via the addition-elimination sequence. 3
- (iii) Why is S_N1 mechanism common to diazonium compounds? Provide evidence in support of the reversible nature of the first step of the mechanism. 3
- (c) (i) Why is propene more reactive towards electrophilic addition than ethene? Explain. 2
- (ii) Propose a mechanism for the formation of *meso*-1,2-dibromostilbene by the addition of bromine to 2-stilbene in nitromethane. 3
- (iii) What is decarboxylation? What product(s) is/are formed by the decarboxylation of 2-methylbutanoic acid? 2

- (iv) How can the compound $\text{HOCH}_2\text{CH}_2\text{NH}_2$ be prepared, starting with a carbonyl compound with one fewer carbon atom than the desired product? 2
- (v) What do you mean by reductive amination? 1
- (d) (i) How can you convert cyclohexene to *trans*-1,2-cyclohexane diol? Propose a mechanism for the reaction. 3
- (ii) Compound A ($\text{C}_{10}\text{H}_{16}$) takes up 2 mols of hydrogen on catalytic hydrogenation. Ozonolysis gives two diketones, B ($\text{C}_6\text{H}_{10}\text{O}_2$) and C ($\text{C}_4\text{H}_6\text{O}_2$). Propose a reasonable structure (or structures) of A. 2
- (iii) Account for the fact that aliphatic α -chloroamines hydrolyse even more rapidly than the related α -chloroethers. 3
- (iv) How can you prepare pentan-1-ol from pentene? Write the reaction. 2
- (e) (i) Although an aryl group is usually found to be electron-withdrawing relative to alkyl, aromatic aldehydes tend to be less reactive than aliphatic aldehydes. Explain. 2